

Starter for Ten

4. Trends in the Periodic Table

Developed by Dr Kristy Turner, RSC School Teacher Fellow 2011-2012 at the University of Manchester, and Dr Catherine Smith, RSC School Teacher Fellow 2011-2012 at the University of Leicester

This resource was produced as part of the National HE STEM Programme





STARTER FOR 10...

4. TRENDS IN THE PERIODIC TABLE

4.1 Period 3

4.1.1 Melting points

4.1.2 Ionisation energy

4.1.3 Atomic radius

4.2 Group 2

4.3 Group 7

Trends in the Periodic Table answers



STARTER FOR 10...

4.1.1 Period 3 melting points

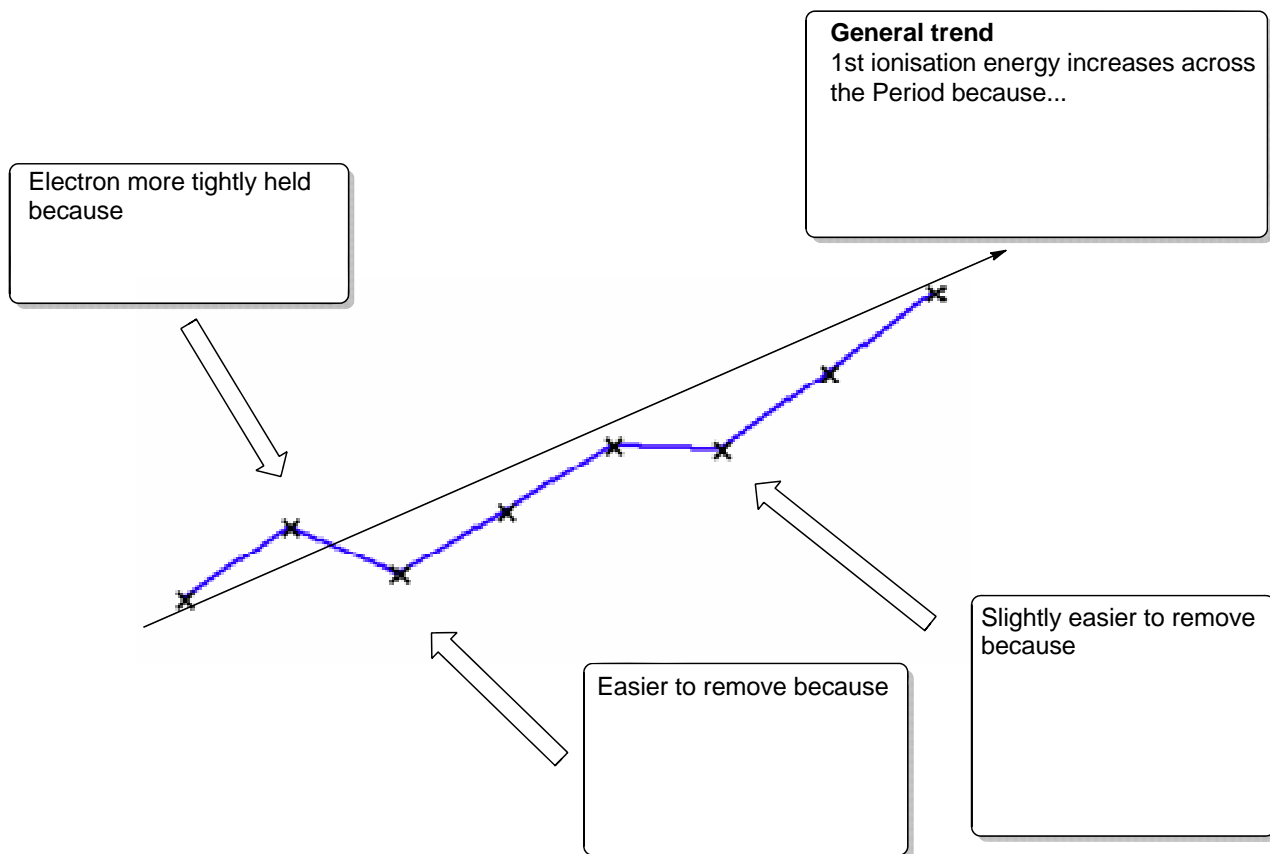
Element	Na	Mg	Al	Si	P	S	Cl	Ar
Bonding	Metallic Na^+						Covalent molecular Cl_2	
Intermolecular bonding	-	-	-	-				
Melting point (K)	1156	1380	2740	2628	553	718	238	87

- Fill in the table above to show how melting point changes across Period 3 according to bonding type. (6 marks)
- Explain the differences in melting point between the following pairs of elements
(a) Magnesium and aluminium (2 marks)
(b) Phosphorus and sulfur (2 marks)



STARTER FOR 10...

4.1.2 Period 3 ionisation energy



1. The diagram shows the trend in 1st ionisation energy across the Period 3 elements. Complete the diagram giving the explanations for the trends seen. (7 marks)
2. Define the term 1st ionisation enthalpy and illustrate with an equation. (3 marks)



STARTER FOR 10...

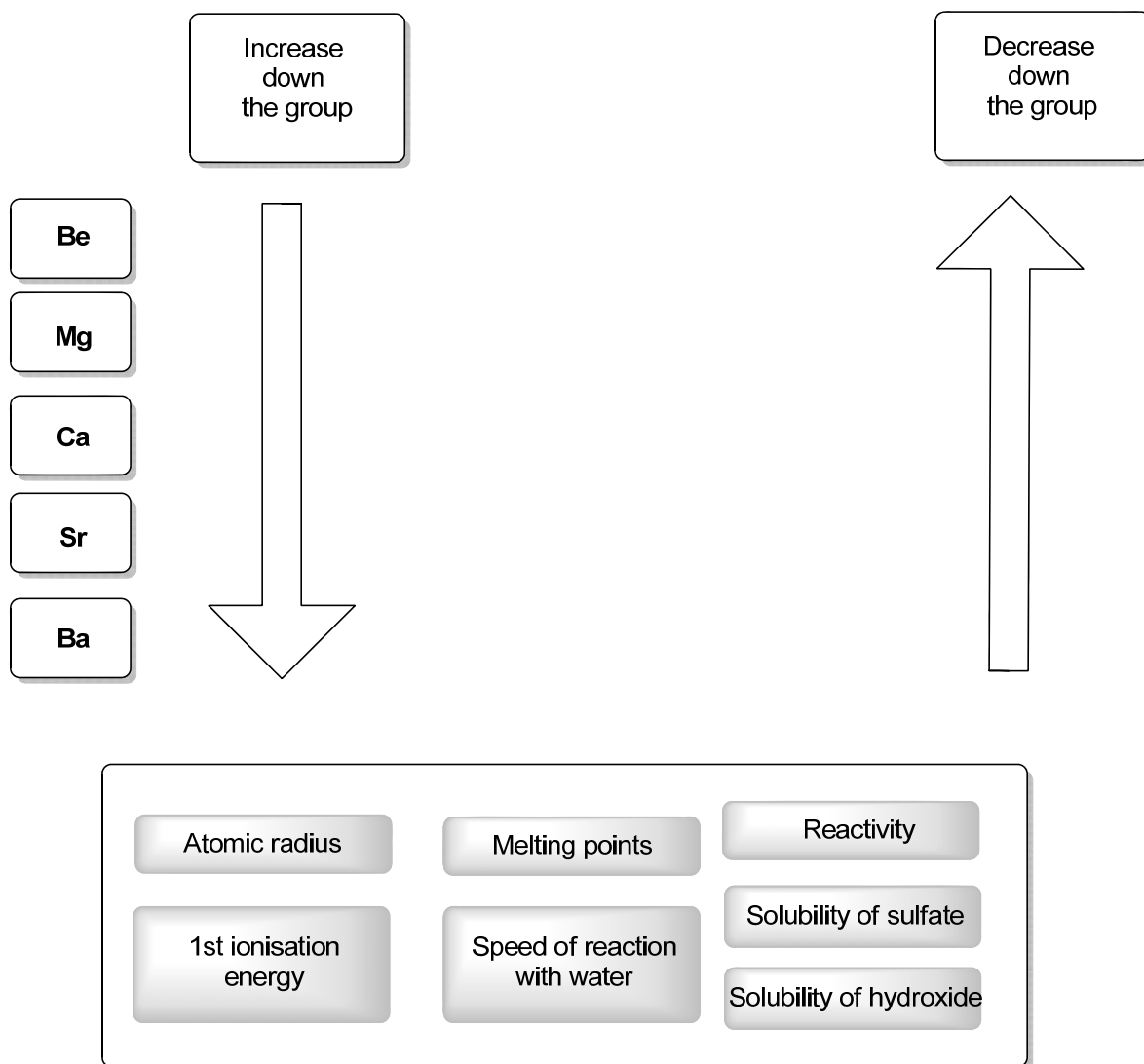
4.1.3 Atomic Radius across Period 3

1. State and explain the general trend in atomic radius across Period 3 (excluding Argon). (4 marks)
2. Atomic radius is a general term. Measurements are taken of metallic radii for metals and covalent radii for molecules. Draw a diagram to show how you could calculate the atomic radius of 2 covalently bonded atoms. (3 marks)
3. Why does Argon not follow the trend? (2 marks)
4. State the effect of atomic radius on the first ionisation energy of an element. (1 mark)



STARTER FOR 10...

4.2 Group 2 trends

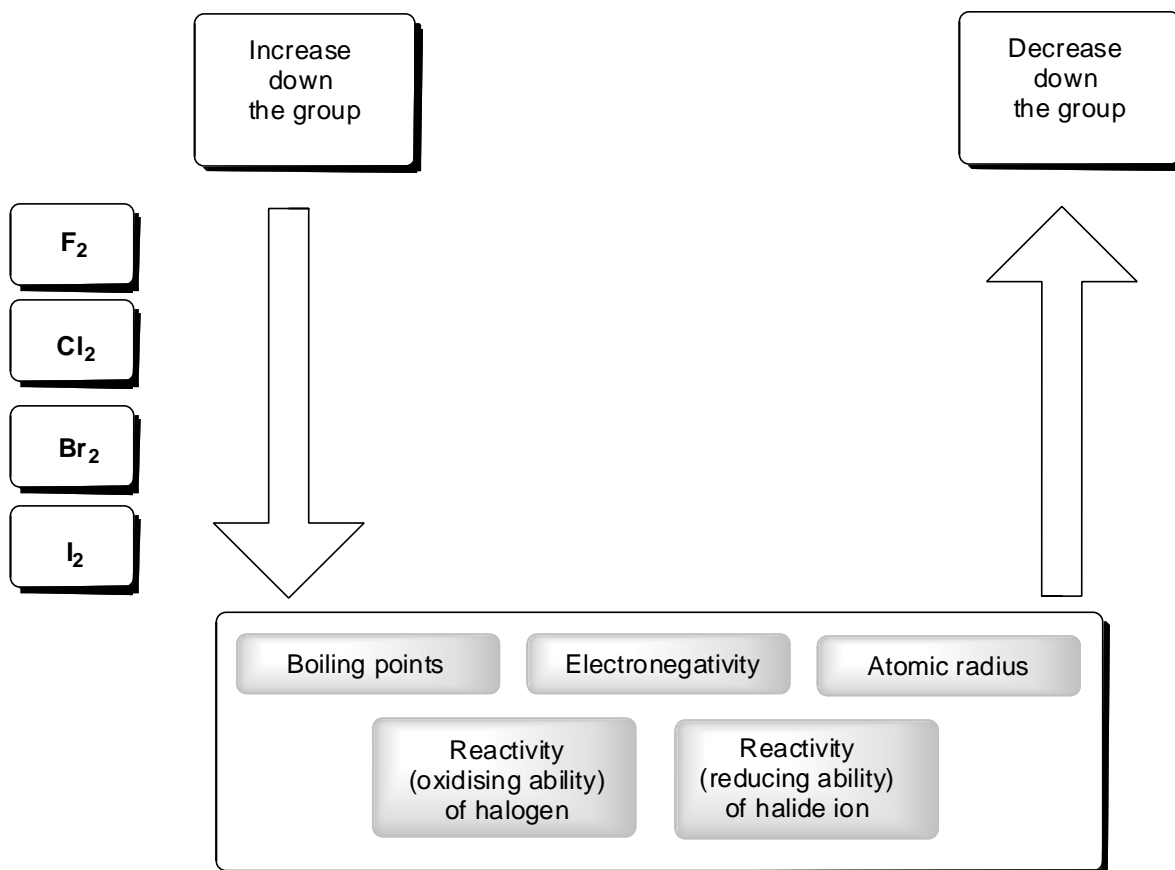


1. Complete the diagram showing the general trends in Group 2 by choosing properties from the grey boxes to annotate the arrows. (7 marks)
2. The trend in solubility of the sulfates is useful as it provides a test for the sulfate anion. Describe how this test is carried out, what is observed when the test is positive for sulfate ions and write an equation including state symbols for this test. (3 marks)



STARTER FOR 10...

4.3 Group 7 trends



1. Complete the diagram showing the general trends in Group 7 by choosing properties from the grey boxes to annotate the arrows. (5 marks)
2. The trend in the reducing ability of the halide ions can be illustrated by the reaction of sodium halides with sulfuric acid. Illustrate this trend using the equations for NaF and NaI and the O.S numbers for sulfur. Write a conclusion stating what your equations show. (5 marks)

Chapter 4 answers

1.

Element	Na	Mg	Al	Si	P	S	Cl	Ar
Bonding	Metallic Na ⁺	Metallic Mg ²⁺	Metallic Mg ²⁺	Covalent macromolecular	Covalent molecular P ₄	Covalent molecular S ₈	Covalent molecular Cl ₂	Covalent atomic
Intermolecular bonding	-	-	-	-	Van der Waals	Van der Waals	Van der Waals	Van der Waals
Melting point (K)	1156	1380	2740	2628	553	718	238	87

(1 mark for Mg/Al correct, 1 mark for each box (x 4), 1 mark for correct VdW on the last row)

2.

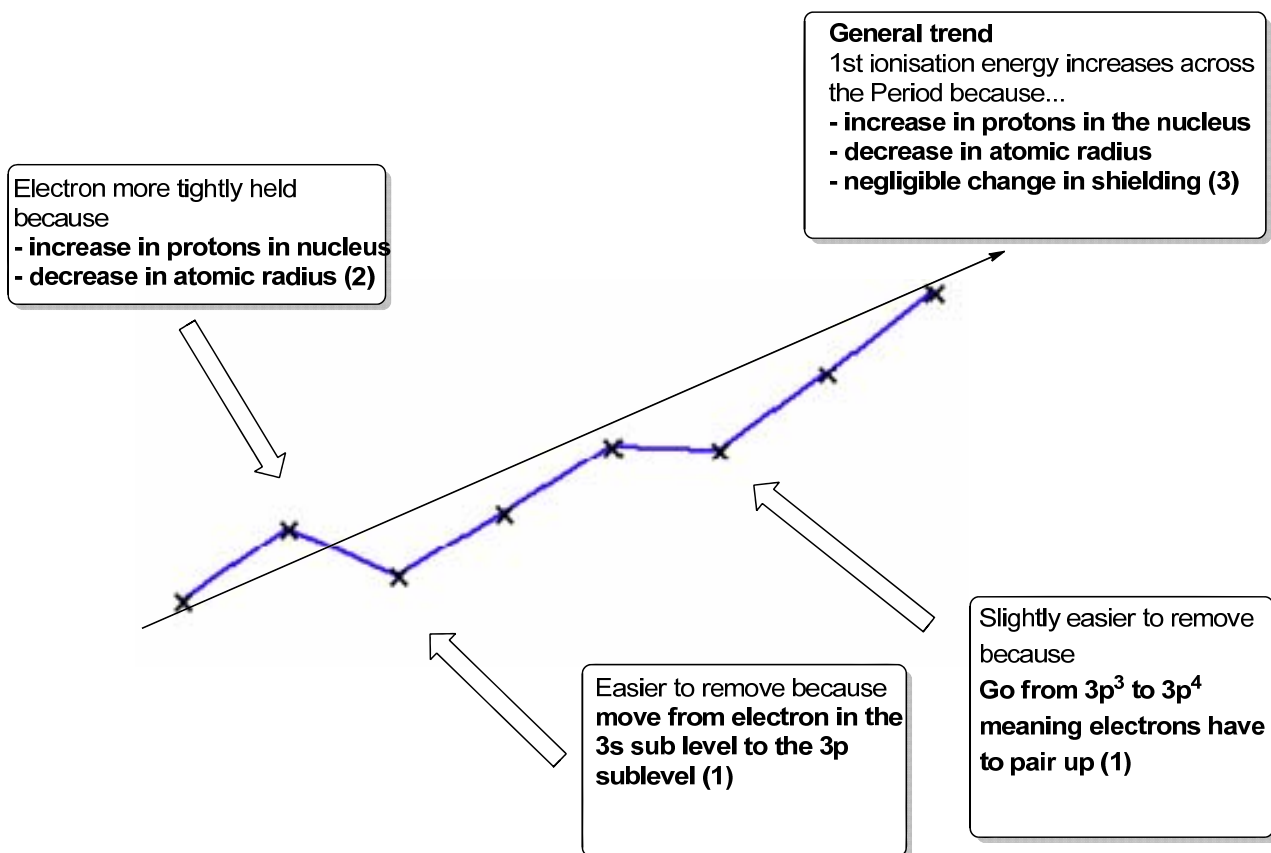
(a) Magnesium and aluminium

Increase in charge on the ion from 2+ (Mg) to 3+ (Al) (1 mark), more electrons in delocalised system (1 mark) therefore strength of metallic bonds increases.

(b) Phosphorus and sulfur

S₈ molecules have more atoms and therefore electrons than P₄ molecules therefore more VdW forces

4.1.2

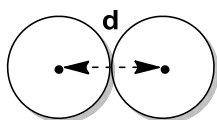


2. The enthalpy change when one mole of **electrons is removed** (1) from **one mole of gaseous atoms** (1) to give one mole of gaseous unipositive ions. Eg, $M(g) \rightarrow M^+(g) + e^-$ (1)

4.1.3

1. Atomic radius decreases across the Period (1 mark)
 More protons in the nucleus (1 mark)
 Negligible increase in shielding as electrons are in the same main energy level (1 mark)
 Greater attraction between the outer electrons and the nucleus/greater effective nuclear charge therefore electrons 'pulled' in. (1 mark)

2.



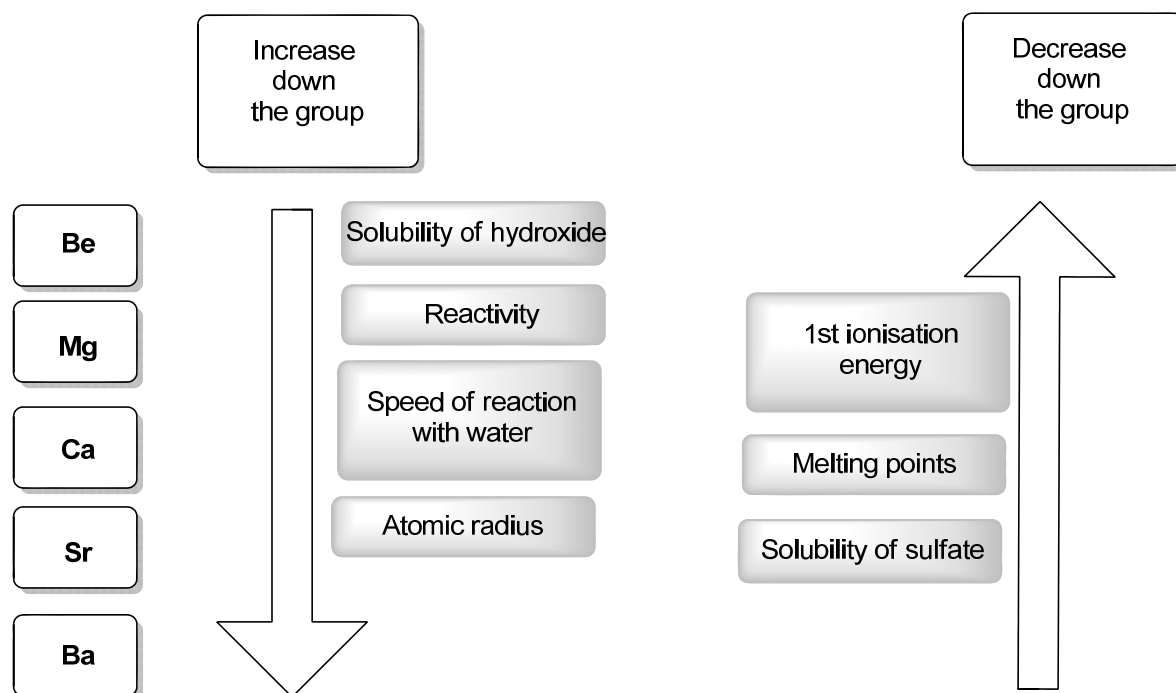
- 1 mark for 2 atoms with nucleus and no overlap
 1 mark for showing internuclear distance
 1 mark for showing relationship between internuclear distance and atomic radius

Atomic radius = $d/2$

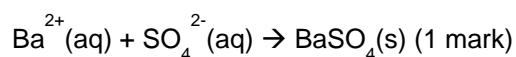
3. Argon is not bonded (1 mark) therefore it is not 'squashed' and has a true atomic radius (1 mark)
 4. As atomic radius decreases the 1st ionisation energy increases (or converse) (1 mark)

4.2

1. (1 mark for each correct)

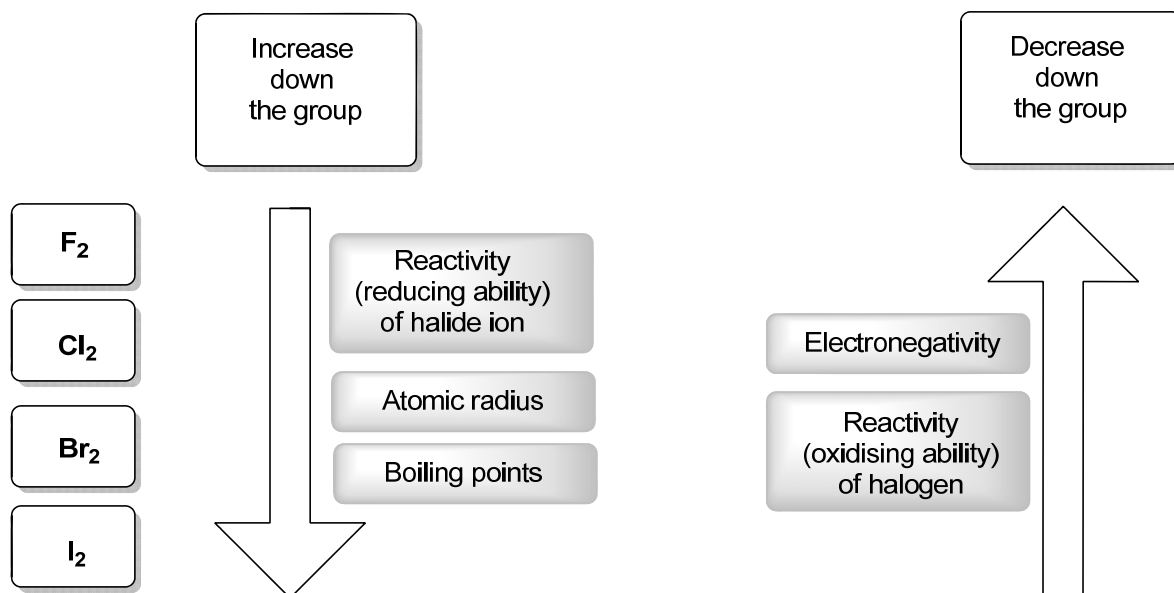


2. Barium chloride solution ($BaCl_2$) is added to the test solution (1 mark for identification of chemical).
 Dilute hydrochloric acid is added. If sulfate ions are present a white precipitate is formed (1 mark for observation).





4.3

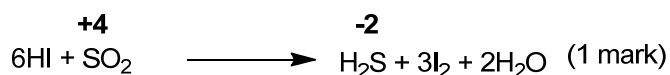
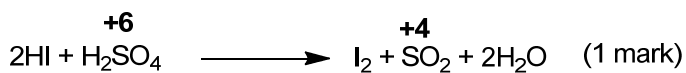
1.



2.



(1 mark for both of these equations)



(1 mark for correct O.S for each compound, H_2SO_4 , NaHSO_4 , SO_2 , H_2S at least once in answer)
 I- is more reducing because it can reduce sulfur from O.S +6 to O.S -2, F- cannot reduce S
 (1 mark must include statements about **both** I- and F- **QoL**).