

Starter for Ten

5. Organic Chemistry

Developed by Dr Kristy Turner, RSC School Teacher Fellow 2011-2012 at the University of Manchester, and Dr Catherine Smith, RSC School Teacher Fellow 2011-2012 at the University of Leicester

This resource was produced as part of the National HE STEM Programme





STARTER FOR 10...

5. ORGANIC CHEMISTRY

5.1 General and mechanism

- 5.1.1 Functional groups
- 5.1.2 Nomenclature
- 5.1.3 Formulae
- 5.1.4 Isomerism
- 5.1.5 Mechanisms and curly arrows
- 5.1.6 Electrophiles and nucleophiles

5.2 Alkanes and alkenes

- 5.2.1 Fractional distillation and cracking
- 5.2.2 Air pollution
- 5.2.3 Greenhouse effect
- 5.2.4 Alkanes
- 5.2.5 Alkanes summary
- 5.2.6 Free-radical mechanisms
- 5.2.7 Ozone layer
- 5.2.8 Electrophilic additions 1
- 5.2.9 Electrophilic additions 2
- 5.2.10 Isomerism
- 5.2.11 Polymers from alkenes

5.3 Haloalkanes and alcohols

- 5.3.1 Substitution reactions
- 5.3.2 Haloalkanes – substitution vs elimination
- 5.3.3 Alcohols
- 5.3.4 Alcohols as intermediates
- 5.3.5 Oxidation of alcohols
- 5.3.6 Biofuels

5.4 Synthetic schemes

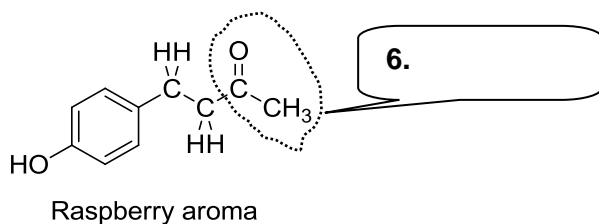
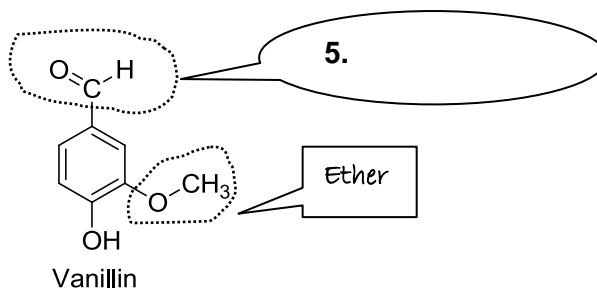
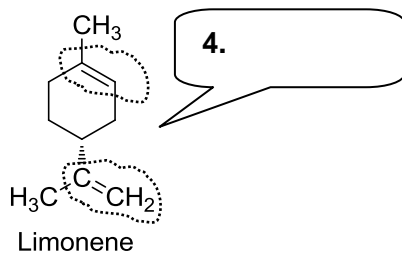
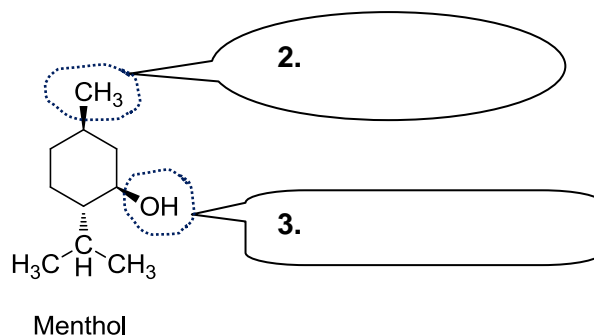
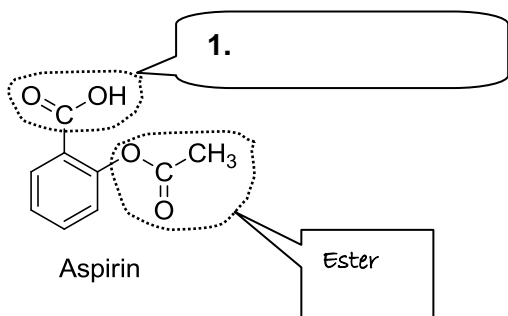
- 5.4.1 Synthetic scheme 1
- 5.4.2 Synthetic scheme 2
- 5.4.3 Synthetic scheme 3



STARTER FOR 10...

5.1.1 Functional groups

In each of the speech bubbles write the general name for the functional group ringed. (In the structures below the rings are shown in a 'skeletal' form. Where you can see a corner then there is a carbon with the appropriate number of hydrogens)



8. Considering the limonene molecule given above.

(a) Draw the displayed formula

(1 mark)

(b) Calculate the molecular formula

(1 mark)

(c) Deduce the empirical formula

(1 mark)



STARTER FOR 10...

5.1.2 Nomenclature

Prefixes

Suffixes

-meth/methan-

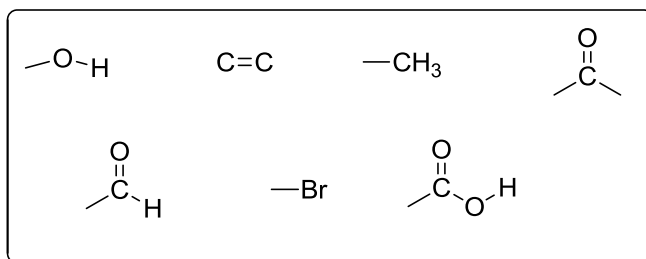
-eth/ethan-

-prop/propan-

-but/butan-

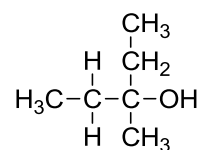
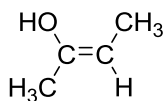
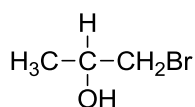
-pent/pentan-


1. Group the following functional groups into prefixes (where the functional group goes before the naming stem) and suffixes (goes after the naming stem). (4 marks)



2. Name the following compounds

(6 marks)






STARTER FOR 10...

5.1.3 Formulae

1. Define the term empirical formula (1)
2. An algebraic formula that can describe any member of a family of compounds is a way of describing a type of formula in organic chemistry.
 - (a) Which formula does this definition refer to? (1 mark)
 - (b) What would this formula be for the family of –
 - i. Alkanes (1 mark)
 - ii Alkenes (1 mark)
3. The empirical formula of the compound 3-methylpentan-2,2-diol is C_3H_7O
 - (a) Deduce its molecular formula (1 mark)
 - (b) Write the structural formula for this compound (1 mark)
 - (c) Show the displayed formula of this compound (1 mark)
4. A hydrocarbon is shown to contain 92.3% carbon and 7.7% hydrogen by mass
 - (a) Calculate the empirical formula of the hydrocarbon (1 mark)
 - (b) The relative molecular mass of the hydrocarbon is 78. What is its molecular formula? (1 mark)
5. Cyclohexane and hex-1-ene have the same molecular formula. What is it? (1 mark)



STARTER FOR 10...

5.1.4 Organic Chemistry: Isomerism

Isomer	Name
1 $\begin{array}{c} \text{H}_3\text{C} \quad \text{CH}_3 \\ \diagdown \quad \diagup \\ \text{C}=\text{C} \\ \diagup \quad \diagdown \\ \text{H}_3\text{C} \quad \text{CH}_3 \end{array}$	
2 $\begin{array}{c} \text{H}_3\text{C} \quad \text{H} \\ \diagdown \quad \diagup \\ \text{C}=\text{C} \\ \diagup \quad \diagdown \\ \text{CH}_3\text{CH}_2\text{CH}_2 \quad \text{H} \end{array}$	2-methylpent-1-ene
3 $\begin{array}{c} \text{H} \quad \text{H} \\ \diagdown \quad \diagup \\ \text{C}=\text{C} \\ \diagup \quad \diagdown \\ \text{CH}_3\text{CH}_2\text{CH}_2 \quad \text{CH}_3 \end{array}$	
4 $\begin{array}{c} \text{H}_3\text{C} \quad \text{H} \\ \diagdown \quad \diagup \\ \text{C}=\text{C} \\ \diagup \quad \diagdown \\ \text{CH}_3\text{CH}_2 \quad \text{CH}_3 \end{array}$	
5 $\begin{array}{c} \text{H} \quad \text{H} \quad \text{H} \\ \quad \quad \\ \text{H}-\text{C}-\text{C}-\text{C}-\text{H} \\ \quad \quad \\ \text{H}-\text{C}-\text{C}-\text{C}-\text{H} \\ \quad \quad \\ \text{H} \quad \text{H} \quad \text{H} \end{array}$	
6	

The table shows 5 isomers.

1. Complete the table by giving the names of the isomers shown (4)
2. State the molecular formula of the isomers (1)
3. Isomer 6 is an alkene with the same molecular formula as the other isomers. Draw one possible structure for this in the box and name it. (2)
4. Give the numbers of the isomers which show geometric isomerism (3)

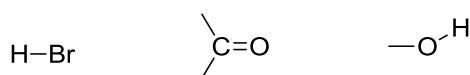


STARTER FOR 10...

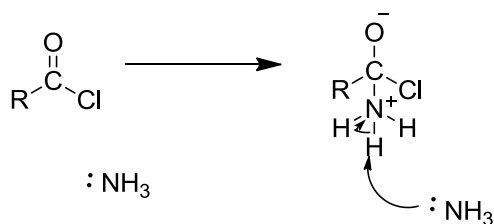
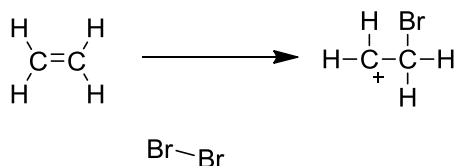
5.1.5 Mechanisms and curly arrows

Mechanisms aren't difficult to remember if you understand the principles behind them. Just learning the arrows doesn't help, you need to develop chemical common sense and decide what is sensible based on electron flow. To do this you need to know areas of high electron density and low electron density.

1. Assign $\delta+$ and $\delta-$ to the following bonds. (6 marks)



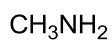
2. Draw curly arrows to show how electrons move in the following transformations (you don't need to have learnt these mechanisms, look at what's happening and use your intuition!) (4 marks)





STARTER FOR 10...

5.1.6 Electrophiles and nucleophiles



Sort the above molecules and ions into electrophiles and nucleophiles in the boxes below

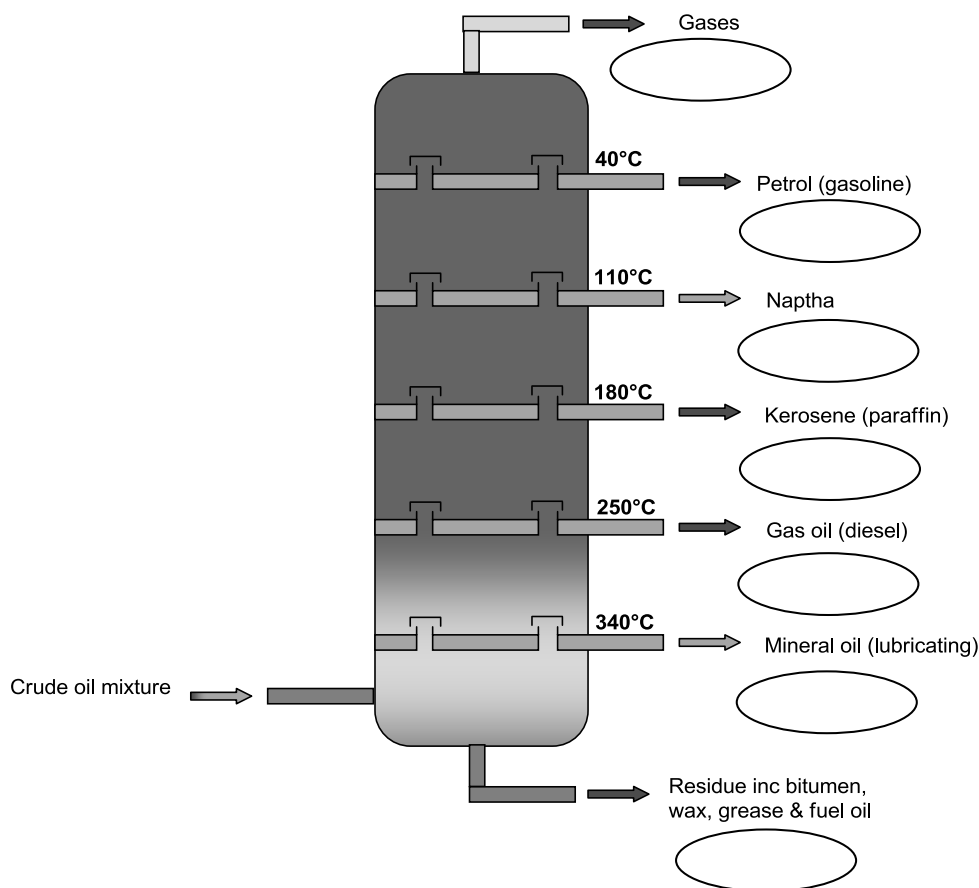
Electrophiles	Nucleophiles



STARTER FOR 10...

5.2.1 Fractional distillation and cracking

Fractional distillation is used to separate the components in a mixture of crude oil



CH₄

Octane

LPG (propane/butane mix)

C₂₀-C₃₀

Fuel for ships

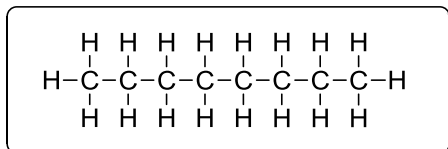
- The diagram shows a fractioning column.
 - Place the formulae and words in the appropriate places on the column. (5 marks)
- Longer chain hydrocarbons are less useful and therefore less commercially attractive than shorter chain hydrocarbons. Cracking can be used to create shorter hydrocarbons from longer ones. There are two methods of cracking, thermal cracking and catalytic cracking. The following statements could apply to either method, next to the statement write a T for thermal or C for catalytic to indicate the appropriate method.
 - Produces lots of alkenes
 - Produces mainly alkanes and some aromatic compounds
 - High pressure (up to 70 atm)
 - Temperature of approximately 450°C
 - Moderate pressure



STARTER FOR 10...

5.2.2 Air Pollution

Alkanes are really useful fuels, producing a lot of energy during combustion. Unfortunately combustion can also lead to the formation of pollutant gases.



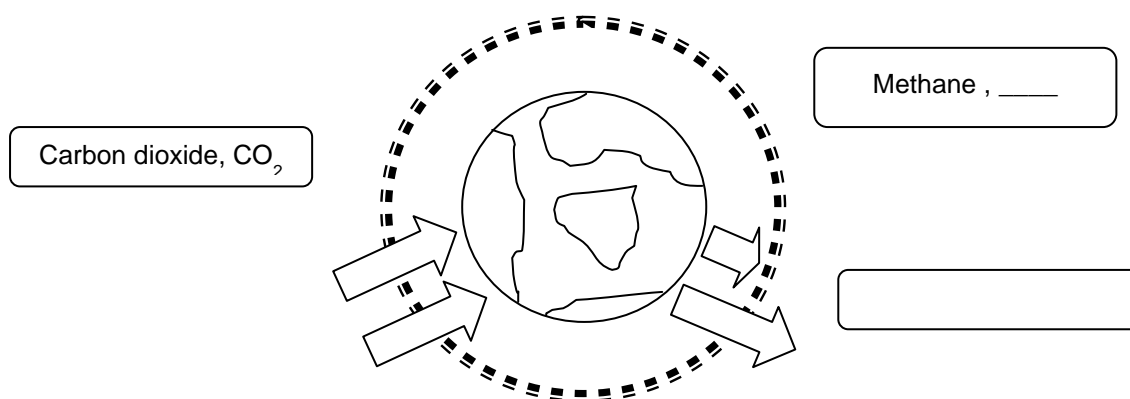
- Octane C_8H_{18} is a component of motor fuel.
 - Write an equation to show the complete combustion of octane (1 mark)
 - Write an equation to show the incomplete combustion of octane (1 mark)
 - Both processes produce gases that could be described as polluting. Identify one pollutant gas from each process and state the problem associated with it. (2 marks)
- In the internal combustion engine, other polluting gases such as NO and SO_2 can be formed which aren't products from combustion of hydrocarbons.
 - Give a reason for the formation of NO in the internal combustion engine (1 mark)
 - Write an equation to show how NO is formed (1 mark)
 - SO_2 is formed from the combustion of sulfur containing impurities in fossil fuels. What environmental problem is associated with the formation of SO_2 ? (1 mark)
- The emission of polluting gases can be reduced by catalytic converters fitted to cars.
 - Write equations to show how NO_2 and CO are transformed into less harmful products in a catalytic converter. (2 marks)
 - Name the metal(s) used as catalysts in catalytic converters. (1 mark)



STARTER FOR 10...

5.2.3 The greenhouse effect

Most scientists now believe that global warming is caused by increased levels of greenhouse gases in the atmosphere. The most widely publicised of these is carbon dioxide, CO_2 .



1. Complete the diagram with the names and formulae of the other greenhouse gases (2 marks)
2. Suggest how carbon dioxide contributes to global warming by explaining how its contribution to the greenhouse effect occurs. (6 marks)
3. Write an equation to show how combustion of octane (C_8H_{18}), a major component of petrol produces greenhouse gases. (1 mark)
4. Suggest why global meat production contributes to global warming. (1 mark)



STARTER FOR 10...

5.2.4 Alkanes

1. Give 3 features of a homologous series (3 marks)
2. Name the method used to separate liquid hydrocarbons (1 mark)
3. The boiling point of alkanes increases as chain length increases. Explain this trend. (2 marks)
4. n-pentane ($\text{CH}_3\text{CH}_2\text{CH}_2\text{CH}_2\text{CH}_3$) is the straight chain isomer of pentane.
 - (a) Draw the other 2 isomers (1 mark)
 - (b) State the difference in boiling point between these isomers and n-pentane. (1 mark)
 - (c) Explain this difference (2 marks)




STARTER FOR 10...

5.2.5 Alkanes summary

Alkanes are saturated hydrocarbons often used as fuels. Alkanes from pentane to octane are generally refined to form petrol and those from nonane to hexadecane refined to form diesel fuel and kerosene.

1. What is the meaning of the term saturated? (1 mark)
2. State the general formula for alkanes (1 mark)
3. Give the molecular formula for octane (1 mark)
4. n-Hexane ($\text{CH}_3\text{CH}_2\text{CH}_2\text{CH}_2\text{CH}_2\text{CH}_3$) is the straight chain isomer of hexane.
 - (a) Draw the other isomers of hexane (4 marks)
 - (b) Write an equation for the complete combustion of hexane (1 mark)
 - (c) Write an equation for the incomplete combustion of hexane and state an environmental problem associated with this (2 marks)

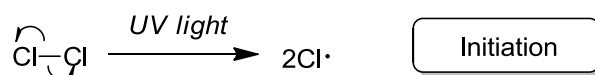


STARTER FOR 10...

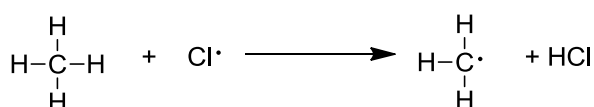
5.2.6 Free radical mechanisms

Free radicals are formed from homolytic bond breaking, where a bond breaks and each atom gets one of the electrons. Alkanes react via a free radical substitution mechanism which has 3 stages, initiation, propagation and termination.

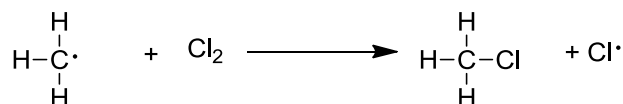
For methane initiation and propagation steps are as follows




Initiation



Propagation



1. Using your knowledge of the free radicals in the mixture, predict the 3 possible termination steps. (3 marks)
2. If chlorine is in excess then substitution of the product chloromethane can occur through a series of propagation steps. Show by a series of reactions how this can lead to the formation of the carcinogen tetrachloromethane (CCl_4). (6 marks)
3. Predict a termination step that could lead to the formation of a product with the empirical formula CHCl_2 . (1 mark)



STARTER FOR 10...

5.2.7 The ozone layer

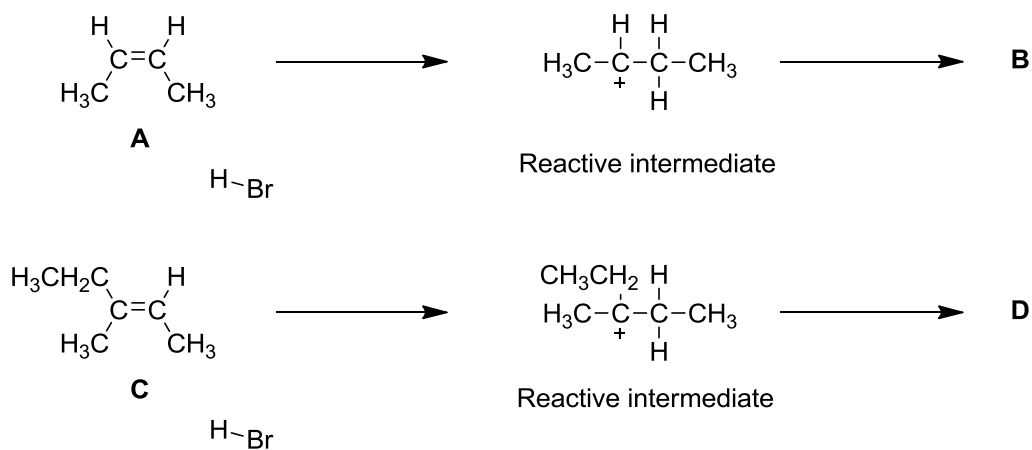
1. Ozone is an allotrope of oxygen.
 - (a) Give the chemical formula for ozone (1 mark)
 - (b) Illustrate how ozone is formed from oxygen (2 marks)
 - (c) state the essential condition in the production of ozone (1 mark)
2. Chlorofluorocarbons (CFCs) were widely used chemicals in the past and are now known to cause damage to the ozone layer. State one use of CFCs. (1 mark)
3. Halothane is an inhalational general anaesthetic commonly used in veterinary surgery and in the developing world. Its IUPAC name is 2-bromo-2,2-dichloro-1,1,1-trifluoroethane.
 - (a) Draw the structure of halothane (1 mark)
 - (b) Show using an equation how halothane could decompose to form chlorine free radicals in the upper atmosphere (1 mark)
 - (c) Illustrate using equations how the free radical generated can lead to the decomposition of ozone (1 mark)
 - (d) State an effect to humans of the decomposition of the ozone layer (1 mark)
 - (e) Hydrofluorocarbons (HFCs) have been developed to replace CFCs in many applications. Why are HFCs not believed to cause decomposition of the ozone layer? (1 mark)



STARTER FOR 10...

5.2.8 Electrophilic addition 1

Consider the following schemes showing the reaction of two different alkenes.



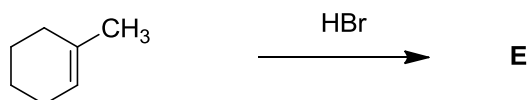
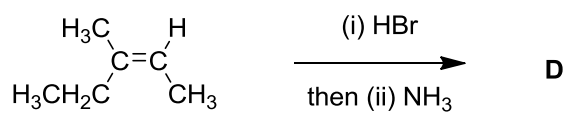
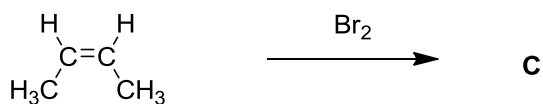
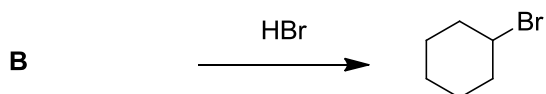
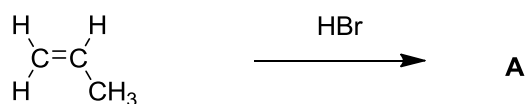
1. Name the geometric isomer A. (1 mark)
2. Complete the mechanisms by addition of arrows, reacting species and final products. (6 marks)
3. What is the name of the reactive intermediate formed in this mechanism? (1 mark)
4. Name the products formed, B and D. (1 mark)
5. The second reaction proceeds according to Markovnikov's rule. What is the driving force behind this rule? (1 mark)



STARTER FOR 10...

5.2.9 Electrophilic addition 2

Draw the structures of and name the missing reactants and products A to E





STARTER FOR 10...

5.2.10 Isomerism in alkanes and alkenes

1. The simplest alkane to show isomerism is C_4H_{10} .
 - (d) Predict the number of isomers C_4H_{10} displays (1 mark)
 - (e) Draw the isomers of C_4H_{10} (1 mark)

2. The next member of the homologous series is C_5H_{12} .
 - (a) Predict the number of isomers C_5H_{12} displays (1 mark)
 - (b) Draw the isomers of C_5H_{12} (2 marks)

3. There are 2 geometric isomers of the alkene C_4H_8 . Draw both isomers and label them E and Z. (1 mark)

4. Draw a pair of geometric isomers for the alkene C_5H_{10} and label them E and Z. (2 marks)

5. Draw 2 isomers of the alkene C_5H_{10} that do not show geometric isomerism. (2 marks)



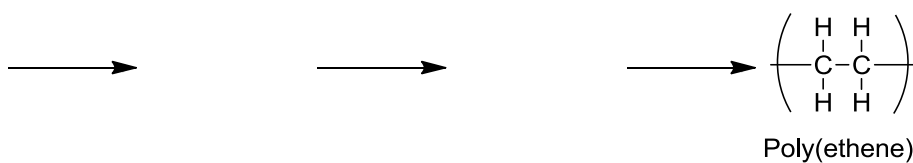
STARTER FOR 10...

5.2.11 Polymers from alkenes

1. Complete the following table to show the alkene and the polymer it makes.
(4 marks)

$\begin{array}{c} \text{H} \quad \text{C}_6\text{H}_5 \\ \diagdown \quad / \\ \text{C}=\text{C} \\ / \quad \diagdown \\ \text{H} \quad \text{H} \end{array}$	
$\begin{array}{c} \text{H} \quad \text{CH}_2\text{CH}_3 \\ \diagdown \quad / \\ \text{C}=\text{C} \\ / \quad \diagdown \\ \text{H}_3\text{C} \quad \text{H} \end{array}$	
	$\left(\begin{array}{cc} \text{H} & \text{CH}_3 \\ & \\ -\text{C} & -\text{C}- \\ & \\ \text{H} & \text{CH}_3 \end{array} \right)_n$
$\begin{array}{c} \text{H} \quad \text{CH}_2\text{CH}_2\text{CH}_3 \\ \diagdown \quad / \\ \text{C}=\text{C} \\ / \quad \diagdown \\ \text{H} \quad \text{H} \end{array}$	

2. In recent years the sustainability of plastics derived from crude oil has become a focus for chemists. There are now many polymers derived from plant sources. Using your knowledge of reactions in AS chemistry, suggest a route to poly(ethene) that is derived from a plant source. Include reagents and conditions where appropriate.
(6 marks)



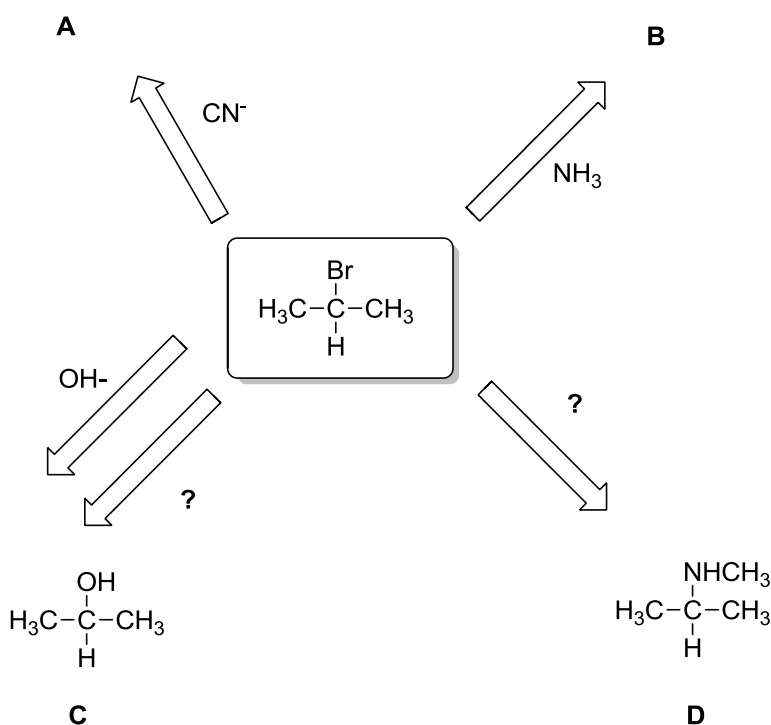


STARTER FOR 10...

5.3.1 Substitution reactions

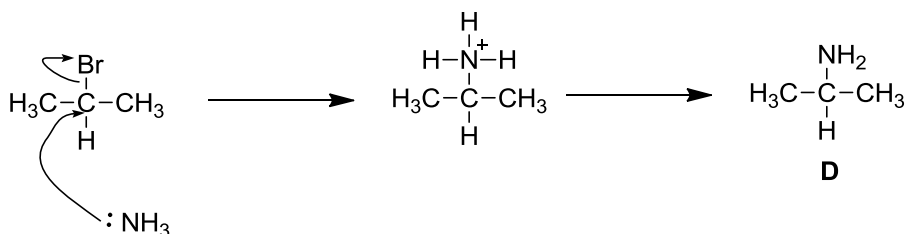
Haloalkanes are useful intermediates in synthesis because they can be transformed into many different compounds via substitution reactions.

- Complete the spider diagram to show the products that can be formed from 2-bromopropane. Each product should be drawn (A and B) and named (A-D) and missing reagents completed. (8 marks)



The reactions proceed via the nucleophilic substitution mechanism. The beginning of this mechanism is outlined below.

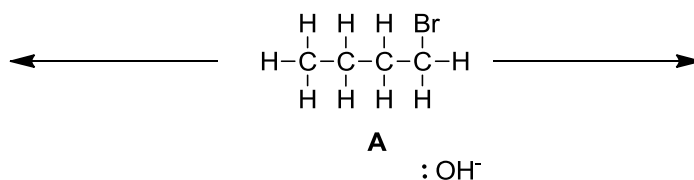
- Complete the mechanism using the appropriate species to show how D is formed from 2-bromopropane. (2 marks)





STARTER FOR 10...

5.3.2 Haloalkanes – substitution vs elimination



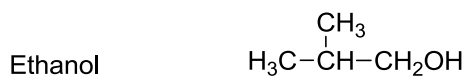
1. Haloalkane A is treated with sodium hydroxide
 - (a) Predict the 2 possible products arising from OH⁻ carrying out a substitution or elimination mechanism, draw the structures and name them. (4 marks)
2. State the role of OH⁻ in the mechanisms leading to these products (2 marks)
3. How do the reaction conditions change in order to select one product over the other one? (2 marks)
4. If you wanted to regenerate A from the elimination product, what reagent would you use and what mechanism would it proceed by? (2 marks)



STARTER FOR 10...

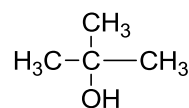
5.3.3 Alcohols

Consider the following alcohols

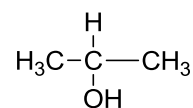


A

B



C



D

2-methylbutan-2-ol

E

Butan-2-ol

F

3-methylbutan-2-ol

G

Give the letters of the alcohols which.....

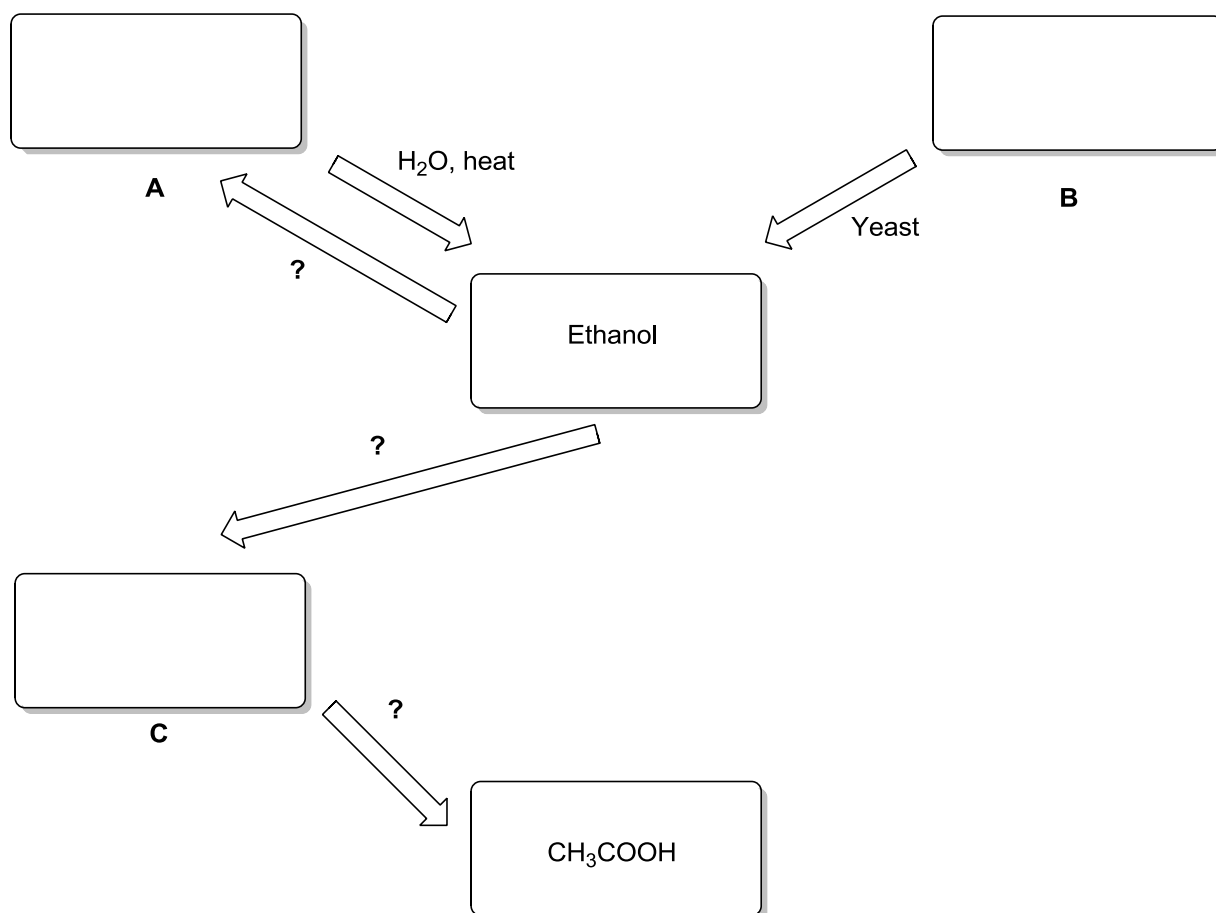
1. Are tertiary alcohols
2. Are oxidised to carboxylic acids
3. Show a colour change orange to green when treated with acidified potassium dichromate solution



STARTER FOR 10...

5.3.4 Alcohols as intermediates

Alcohols are useful intermediates. The scheme below shows how ethanol can be formed and reacted to give various products. Complete the diagram with the structures of A-C and the missing reagents. (5 marks)

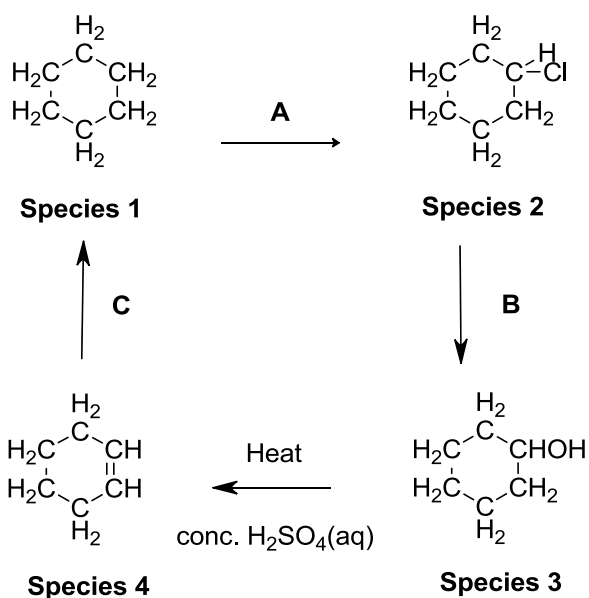


1. Name the process by which the source material B is transformed into ethanol and write a balanced equation for this process. (2 marks)
2. Of the two source materials A and B, B is considered to be more sustainable. Explain why. (1 mark)
3. The conversion of ethanol to A can be classed as dehydration. Explain why this is the case. (1 mark)
4. Which substance can be tested for using aqueous sodium bicarbonate solution? (1 mark)



STARTER FOR 10...

5.4.1 Synthesis 1



1. Name species 1 to 4. (4 marks)
2. Indicate the reagents and conditions required for each of the reactions A to C (3 marks)
3. Name the mechanism by which reaction A proceeds (1 mark)
4. Species 3 contains the alcohol functional group. What class of alcohols does this species belong to? (1 mark)
5. How could the presence of the double bond in species 4 be confirmed? (1 mark)



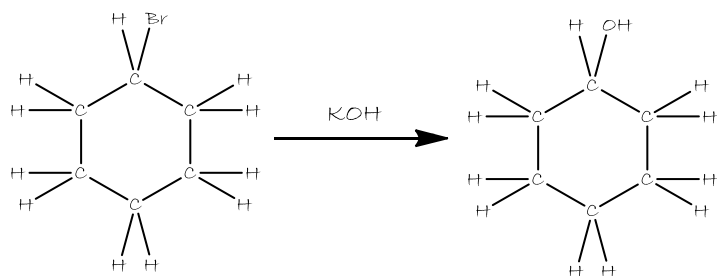
STARTER FOR 10...

5.4.2 Organic Chemistry: Synthesis 2

1. Fill in the lab book below to show the number of moles of each species

(3 marks)

Synthesis of cyclohexanol



Chemical Formula: $C_6H_{11}Br$

Mr: 163.06

m/z: 162.00 (100.0%), 164.00 (97.3%),

Chemical Formula: $C_6H_{12}O$

Mr: 100.16

m/z: 100.09 (100.0%),

Bromocyclohexane (1.00g, moles) was dissolved in dichloromethane (10cm³) and KOH (0.50g, moles) added. The flask was heated and stirred. The products were isolated and included the desired cyclohexanol (0.46g, moles) together with another organic product with Mr of 84 which decolourised bromine water.

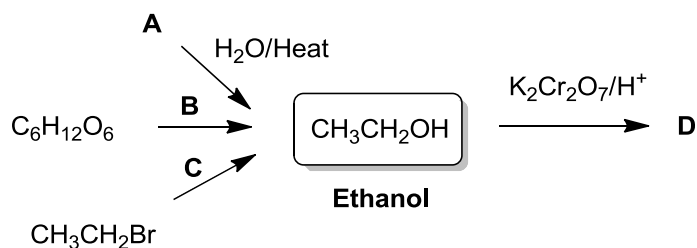
- Calculate the percentage yield of cyclohexanol (1 mark)
- Name and outline the mechanism for the conversion of bromocyclohexane to cyclohexanol (3 marks)
- Suggest a way the student could confirm the presence of the OH group in the cyclohexanol product (1 mark)
- Identify the other organic product and name the mechanism by which it was formed (2 marks)



STARTER FOR 10...

5.4.3 Organic Chemistry: Synthesis 3

Consider the following reaction scheme



1. Suggest the identity of reactant A (1 mark)
2. Give the name of process B and state the reagents and conditions (2 marks)
3. State the reagents and conditions for reaction C (1 mark)
4. State the class of alcohols that ethanol belongs to (1 mark)
5. Suggest the identity of product D (1 mark)
6. Describe the colour change seen when ethanol is converted to product D (1 mark)
7. Name the class of reactions to which the conversion of ethanol into D belongs (1 mark)
8. Of the three synthetic routes to ethanol, state which you feel is the most sustainable and explain your answer (2 marks)

Chapter 5 ANSWERS

5.1.1 Functional groups

1. Carboxylic acid
2. Methyl
3. Alcohol
4. Alkene
5. Aldehyde
6. Ketone
7. Halogen, or chlorine
8. (a) displayed formula should show all the bonds (look for all the C-H bonds on the methyl groups drawn out)
(b) $C_{10}H_{16}$
(c) C_5H_8

5.1.2 Nomenclature

1. **Prefixes** – OH, -Br, CH_3 , **Suffixes** C=C, RCOR, RCHO, RCOOH, -OH ($\frac{1}{2}$ mark each)
2. 1-bromo-propan-2-ol (or numbers the other way around), 2-hydroxybut-2-ene (or but-2-en-2-ol), 3-methylpentan-3-ol
(2 marks each, one mark for getting the correct naming stems in there, the other for the correct order)

5.1.3 Formulae

1. The simplest whole number ratio of elements in a substance
2. (a) General formula (b) (i) C_nH_{2n+2} , (ii) C_nH_{2n}
3. (a) $C_6H_{14}O_2$ (b) $CH_3C(OH)_2CH(CH_3)CH_2CH_3$ (c) All bonds should be drawn out, look for -O-H bonds drawn.
4. (a) CH (b) C_6H_6
5. C_6H_{12}

5.1.4 Isomerism

Question 1

- | | | |
|--------------------------|-----------------------|----------------|
| 1. 2,3-dimethylbut-2-ene | 3. Hex-2-ene | 5. Cyclohexane |
| 2. – | 4. 3-methylpent-2-ene | |

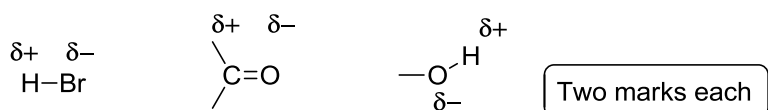
Question 2 C_6H_{12}

Question 3 Hex-3-ene $CH_3CH_2CH=CHCH_2CH_3$

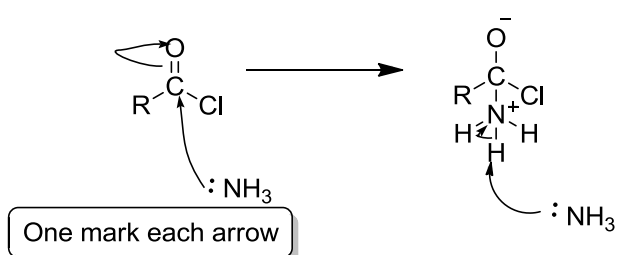
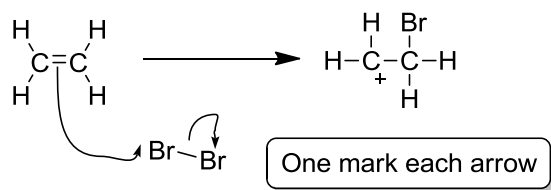
Question 4 Isomers 3, 4 and 6

5.1.5

1.



2.



5.1.6

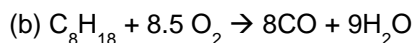
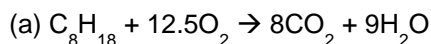
Electrophiles (electron deficient molecules and positive ions)	Nucleophiles (molecules with lone pairs and negative ions)
H^+	CH_3NH_2
BF_3	NH_3
H_3O^+	CN^-
AlCl_3	H_2O
NO_2^+	OH^-

5.2.1

- CH_4 and LPG in Gases (2)
 Octane in *petrol* (1)
 C_{20} - C_{30} in *lubricating oil* (1)
 Fuel for ships in *residues* (1)
- T C T C C (5)

5.2.2

1.

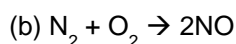


(c) Complete – CO_2 (or Water vapour) formed, greenhouse gas

Incomplete – CO formed, poisonous or water vapour formed, greenhouse gas


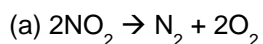
2.

(a) Reaction of N_2 and O_2 from the air at high temperature/in the presence of a spark



(c) Acid rain

3.



(b) Platinum/Rhodium

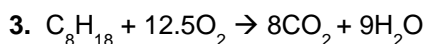
5.2.3

1. CH_4 (1 mark)

Water, H_2O (1 mark)

2.

- ✓ EM radiation is emitted from the sun
- ✓ Earth re-emits infra-red radiation
- ✓ The C=O bonds in CO_2 absorb the IR
- ✓ Not all the IR escapes from the atmosphere
- ✓ Energy is transferred to other molecules by collisions which increases their kinetic energy
- ✓ Increases global temperatures



4. Methane is produced by animals/decomposition of animal waste produces methane

5.2.4

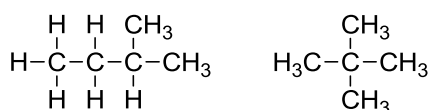
1. Any 3 from

- ✓ Same functional group
- ✓ Same general formula
- ✓ Each member differs from the next by the addition of a CH_2 unit
- ✓ Similar chemical properties

2. Fractional distillation

3. Longer chain length \rightarrow more atoms (and therefore more electrons) \rightarrow more VdW forces

4. (a)



(b) Branched chain isomers have a lower bpt/straight chain alkanes have a higher bpt

(c) Straight chain alkanes have a higher surface contact (1 mark) therefore greater VdW forces (1 mark)

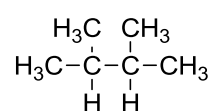
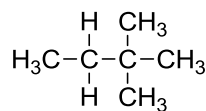
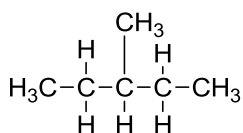
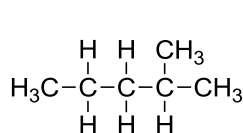
5.2.5

1. No C=C bonds

2. $C_n H_{2n+2}$

3. $C_8 H_{18}$

4. (a)





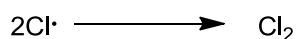
(b) $C_6H_{14} + 9.5O_2 \rightarrow 6CO_2 + 7H_2O$

(c) $C_6H_{14} + 6.5O_2 \rightarrow 6CO + 7H_2O$







CO is poisonous/water vapour is a greenhouse gas

5.2.6


Question 1



Question 2 (Successive substitutions on the alkyl radical)



Question 3

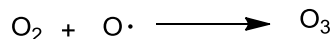
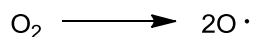


5.2.7

1.

(a) O_3

(b)

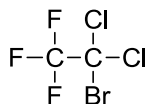


(c) UV light

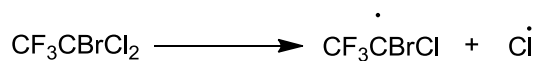
2. Propellants in aerosols/dry cleaning solvents/coolants in fridges/manufacture of foam plastics/fire extinguishers

3.

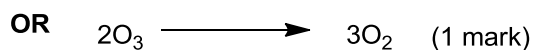
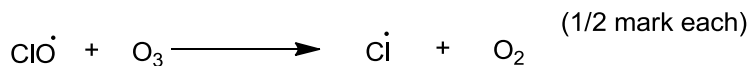

(a)



(b)



(c)



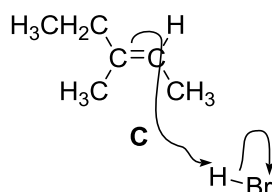
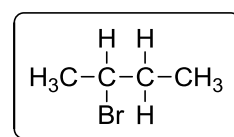
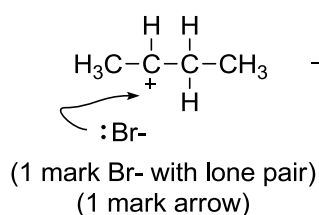
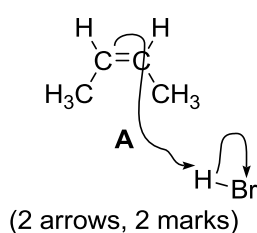
(d) Increased UV exposure/skin cancer

(e) No chlorine/No C-Cl bond

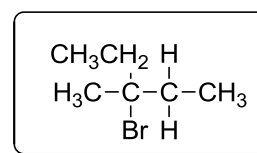
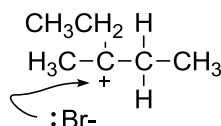
5.2.8

1. But-2-ene

2.



(1 mark arrow showing Markovnikov addition)



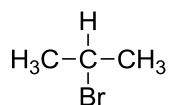
(1 mark structure)

3. Carbocation (1mark)

4. B = 2-bromo-butane, D = 3-bromo-3-methylpentane (½ mark each)

5. Stability of carbocation (1 mark)

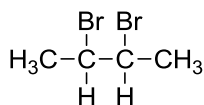
5.2.9



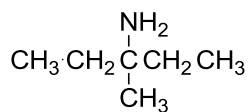
A



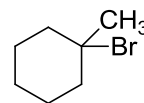
B



C



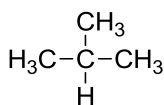
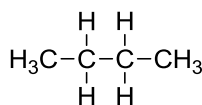
D



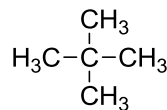
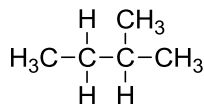
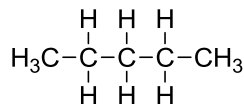
E

5.2.10

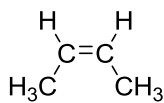
1.



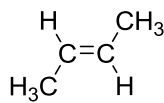
2.



3.

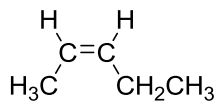


Z

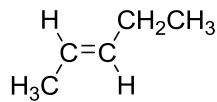


E

4.

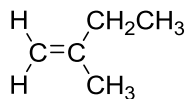
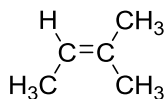


Z

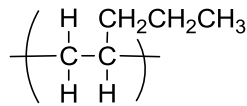
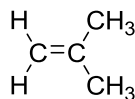
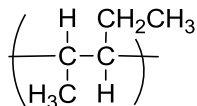
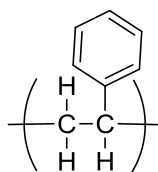


E

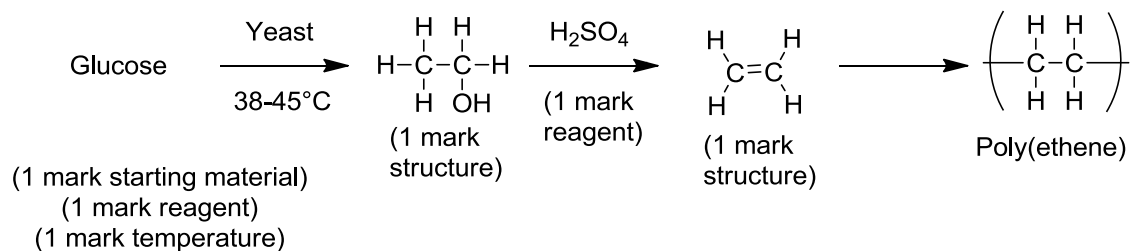
5.



5.2.11

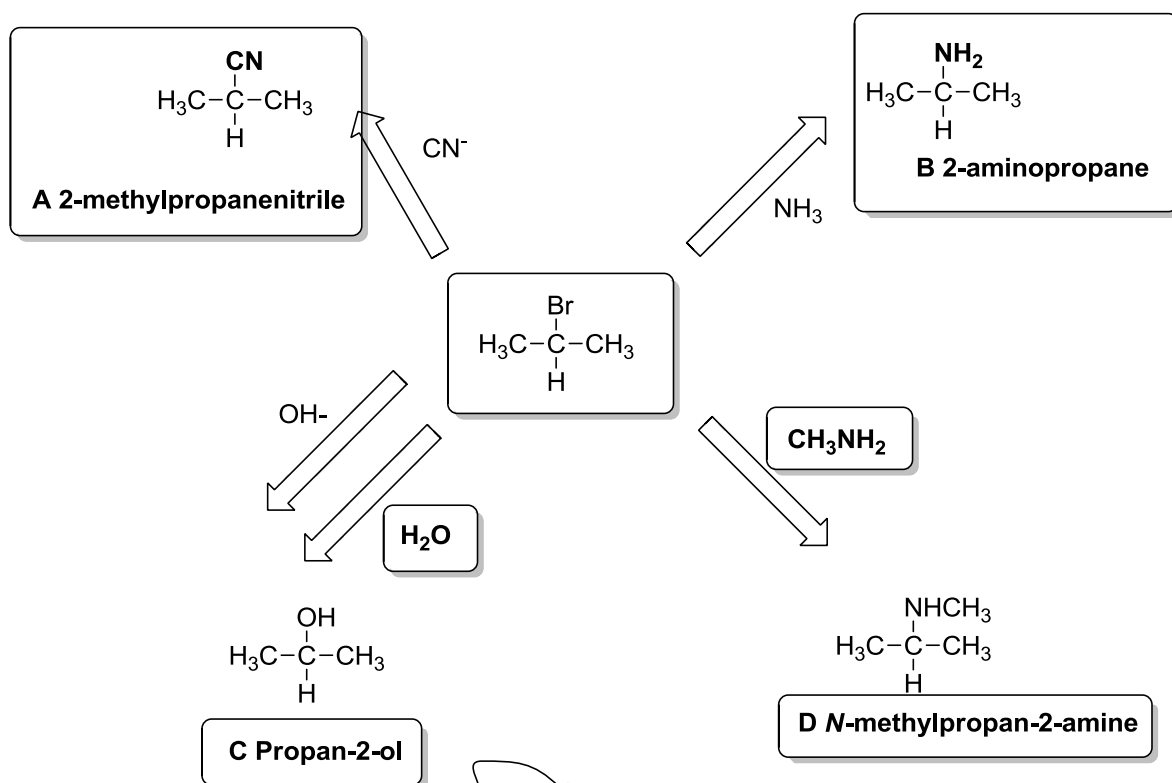


(1 mark each)

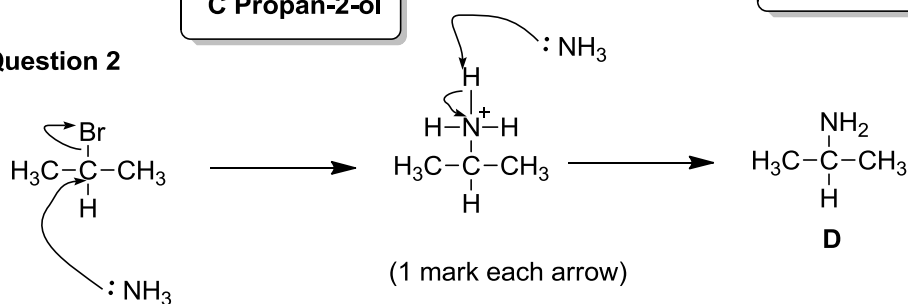


5.3.1

Question 1

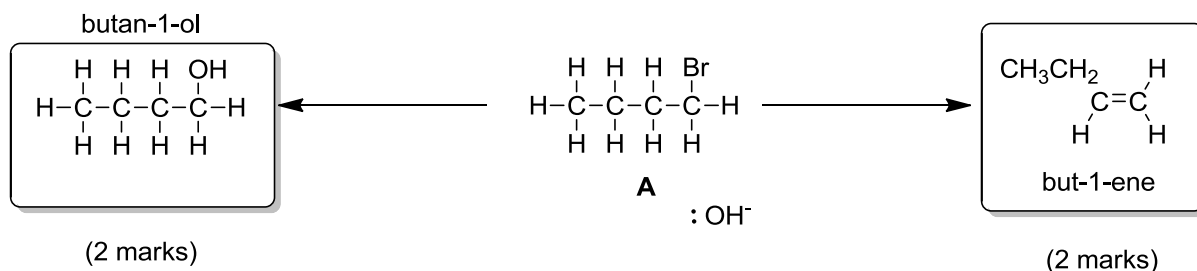


Question 2



5.3.2

1. (a)



2. Substitution – the OH⁻ acts as a nucleophile

Elimination – the OH⁻ acts as a base

3. Substitution – aqueous NaOH

Elimination – ethanolic NaOH

4. H-Br, electrophilic addition

5.3.3

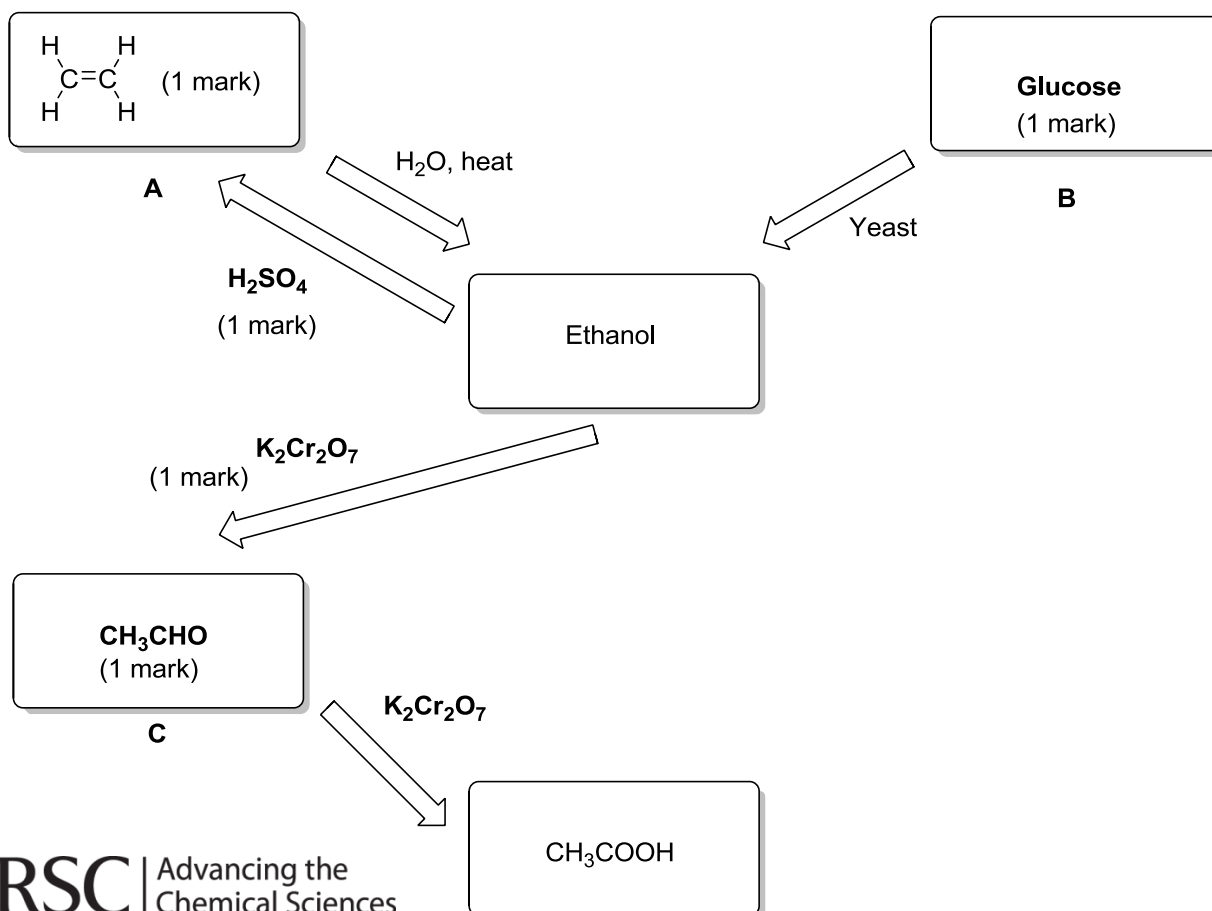
1. C + E

2. A + B

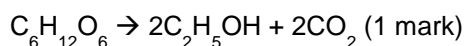
3. A, B, D, E, F, G

5.3.4

1.



2. Fermentation (1 mark)



3. The source material is renewable
4. Ethanoic acid/the acid

5.4.1

1. Species 1 = cyclohexane (1 mark)
Species 2 = chlorocyclohexane (1 mark)
Species 3 = cyclohexanol (1 mark)
Species 4 = cyclohexene (1 mark)
2. A Cl_2 + UV light (1 mark)
B aqueous sodium hydroxide (1 mark)
C $\text{H}_2(\text{g})/\text{Pt}$ (1 mark)
3. Free radical substitution (1 mark)
4. secondary (1 mark)
5. Bromine water (1 mark)

5.4.2

1. 1 mark for correct calculation method mass/Mr
Bromocyclohexane = $1.00/163.03 = 6.13 \times 10^{-3}$ moles (1 mark)
Cyclohexanol = $0.46/100.16 = 4.59 \times 10^{-3}$ moles (1 mark)
2. 74.9% (1 mark)
3. Nucleophilic substitution (1 mark)
Arrow from OH^- with lone pair shown to the C of the C-Br bond (1 mark)
Arrow from the C-Br bond to the Br atom (1 mark)
4. Infrared spectroscopy (1 mark)
5. cyclohexene (1 mark)
Elimination (1 mark)

5.4.3

1. A is ethene ($\text{CH}_2=\text{CH}_2$) (1 mark)
2. Fermentation (1 mark)
Yeast (or zymase) (1 mark)
Any one from (1 mark)
Temperature between 38-45°C
Anaerobic conditions
3. Aqueous NaOH (1 mark)
4. Primary alcohol (1 mark)

5. Ethanoic acid (1 mark)
6. Orange to green (1 mark)
7. Oxidation (1 mark)
8. Any method could be argued here provided that the explanation is linked to a suitable reason such as
Sustainability of feedstocks
Atom economy
Energy needs
Side reactions/waste
(1 mark for method with appropriate explanation)